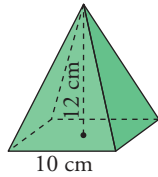


¿Sabes hallar la superficie de algunos poliedros y cuerpos de revolución, obteniendo previamente alguno de sus elementos, si fuera necesario?

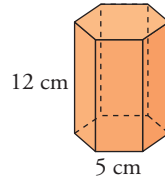
Halla el área total de los siguientes cuerpos:

1

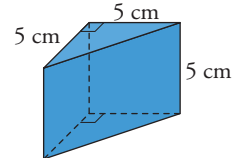
(a)



(b)

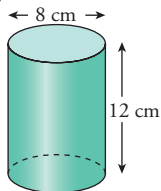


(c)

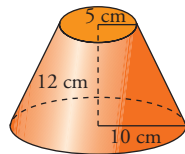


2

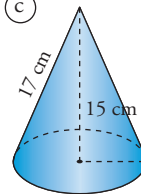
(a)



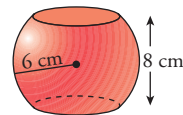
(b)



(c)



(d)



(e)

